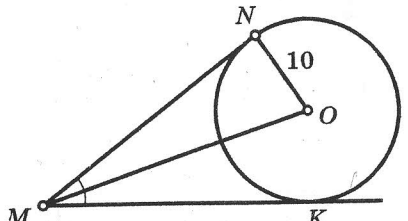
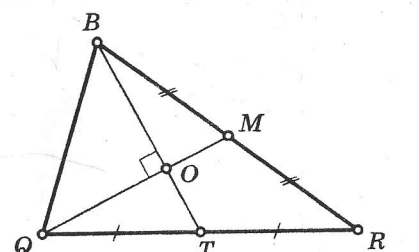
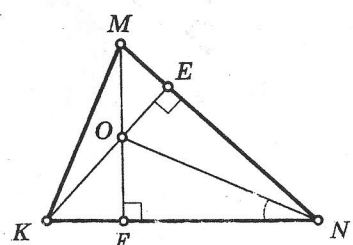
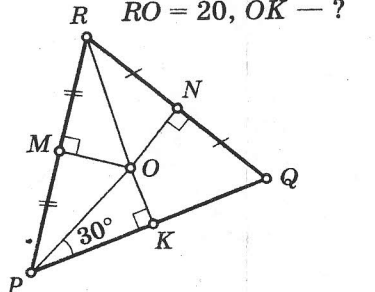
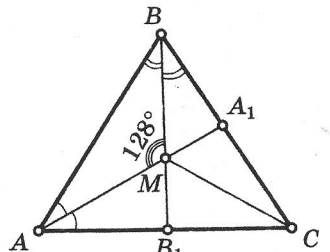
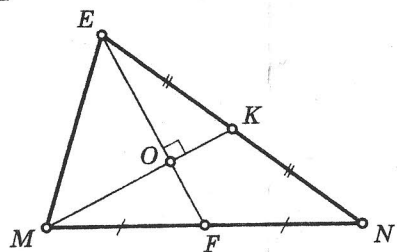
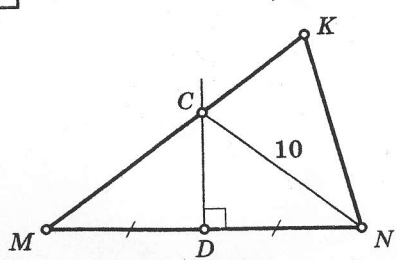
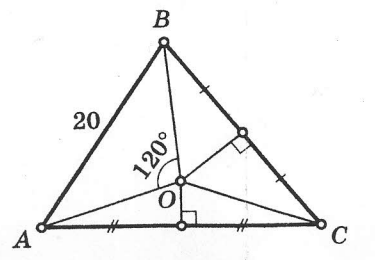
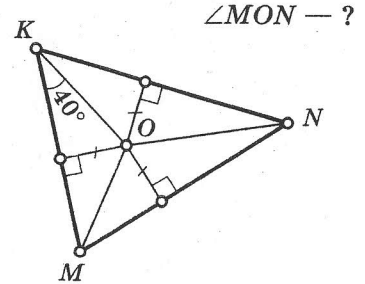
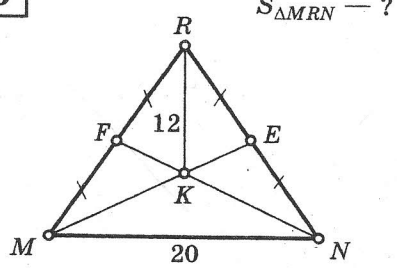
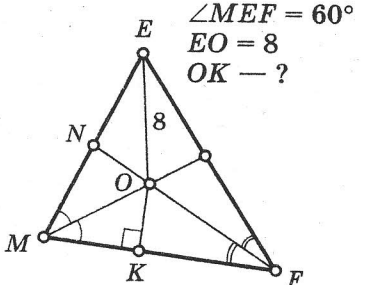
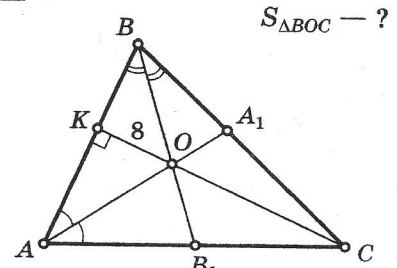
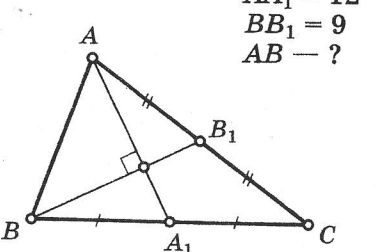
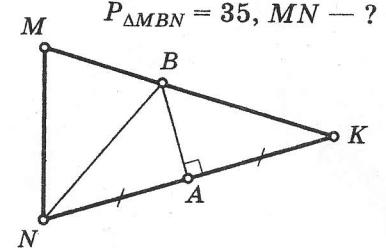
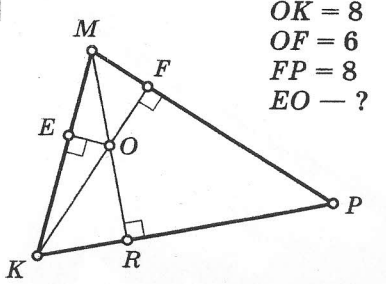


ЧЕТЫРЕ ЗАМЕЧАТЕЛЬНЫЕ ТОЧКИ ТРЕУГОЛЬНИКА

Таблица 22

Окончание табл. 22

<p>1 $\angle NMK = 60^\circ$, MO — ?</p> 	<p>5 $QM = 9$, $BT = 12$, $S_{\Delta BOQ}$ — ?</p> 
<p>2 $\angle MKN = 66^\circ$, $\angle FNO$ — ?</p> 	<p>6 $RO = 20$, OK — ?</p> 
<p>3 $\angle MCB_1$ — ?</p> 	<p>7 $EF = 18$, $MK = 15$, ON — ?</p> 
<p>4 $MK = 17$, CK — ?</p> 	<p>8 OC — ?</p> 

<p>9 $\angle MON$ — ?</p> 	<p>13 $S_{\Delta MRN}$ — ?</p> 
<p>10 $\angle MEF = 60^\circ$ $EO = 8$ OK — ?</p> 	<p>14 $BC = 20$ $S_{\Delta BOC}$ — ?</p> 
<p>11 $AA_1 = 12$ $BB_1 = 9$ AB — ?</p> 	<p>15 $MK = NK = 20$ $P_{\Delta MBN} = 35$, MN — ?</p> 
<p>12 $OK = 8$ $OF = 6$ $FP = 8$ EO — ?</p> 	<p>16 $S_{\Delta OBC}$ — ?</p> 